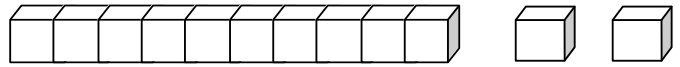


3..2...1...0

## Les nombres de 0 à 12

12

douze



1. Dénombrer chaque collection.



\_\_\_\_\_



\_\_\_\_\_



\_\_\_\_\_



\_\_\_\_\_








\_\_\_\_\_



\_\_\_\_\_

2. Complète chaque collection.



12

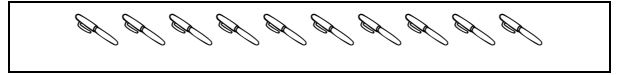
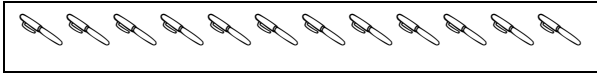
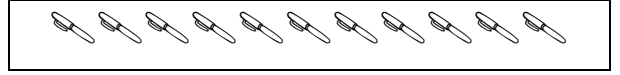
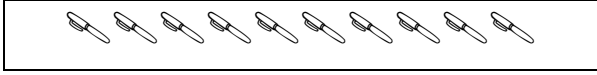
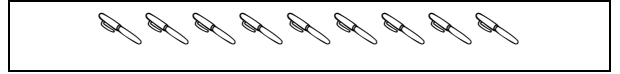
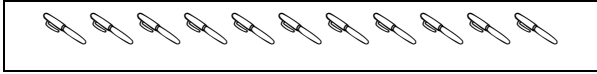
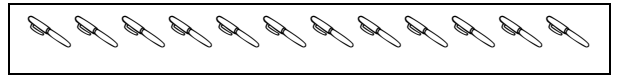
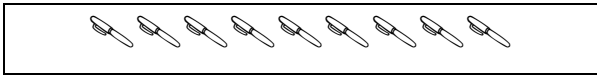
9

7

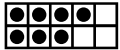
10

11

3. Associe les collections qui ont le même nombre d'objets.




4. Ecris les nombres en lettres.



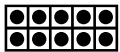
sept -



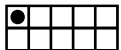
huit -



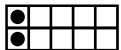
neuf -



dix -



onze -



douze -